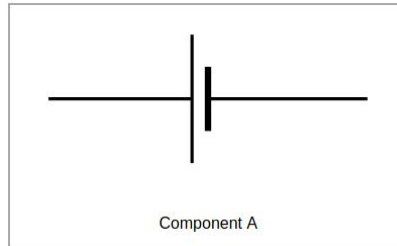


Circuit Components Questions

Question 1

Component A is:

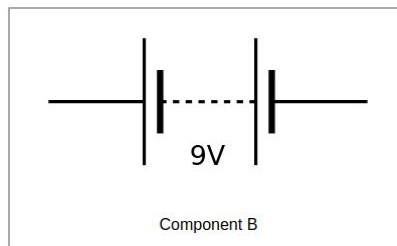
- A. Battery
- B. Cell
- C. Capacitor
- D. Switch



Question 2

Component B is:

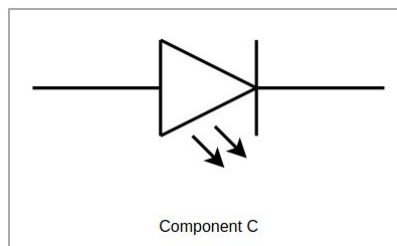
- A. Battery
- B. Cell
- C. Power Supply
- D. Transistor



Question 3

Component C is:

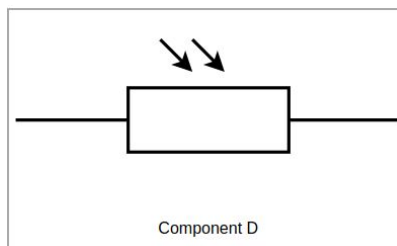
- A. Diode
- B. Photodiode
- C. LDR
- D. LED



Question 4

Component D is:

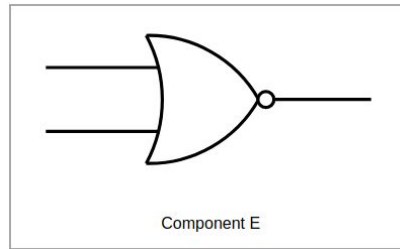
- A. Photodiode
- B. LED
- C. LDR
- D. Thermistor



Question 5

Component E is:

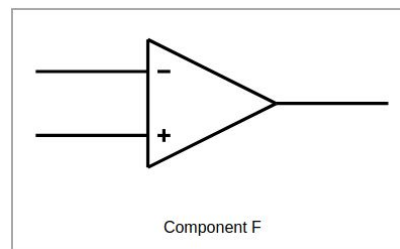
- A. AND gate
- B. OR gate
- C. NAND gate
- D. NOR gate



Question 6

Component F is:

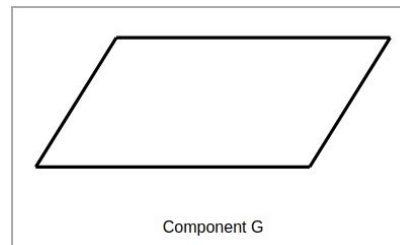
- A. NOT gate
- B. Op Amp
- C. Schmitt Inverter
- D. Diode



Question 7

Component G is:

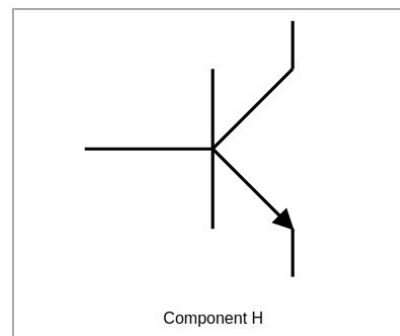
- A. Terminal
- B. Process
- C. Input / Output
- D. Decision



Question 8

Component H is:

- A. NPN Transistor
- B. MOSFET
- C. Relay
- D. Diode



Answers

1. B
2. A
3. D
4. C
5. D
6. B
7. C
8. A

Website

http://www.pfnicholls.com/Electronics_Resources/QuestionIndex.html

© Paul Nicholls

June 2020



Electronics Resources by Paul Nicholls is licensed under a [Creative Commons Attribution 4.0 International License](https://creativecommons.org/licenses/by/4.0/).